

Name: \_\_\_\_\_

October 26, 2020

# MATHS WORKSHEET

GENERATOR

11-PLUS  
SATS  
GCSES



- 1) Find area of square having each side (s) equals 80 cm



Answer: \_\_\_\_\_

- 2) Find area of square having each side (s) equals 14 cm



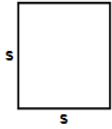
Answer: \_\_\_\_\_

- 3) Find area of square having each side (s) equals 87 ft



Answer: \_\_\_\_\_

- 4) Find area of square having each side (s) equals 59 m




Answer: \_\_\_\_\_

- 5) Find area of square having each side (s) equals 92 m



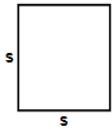
Answer: \_\_\_\_\_

- 6) Find area of square having each side (s) equals 68 m




Answer: \_\_\_\_\_

- 7) Find area of square having each side (s) equals 77 m



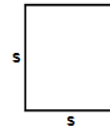
Answer: \_\_\_\_\_

- 8) Find area of square having each side (s) equals 23 cm




Answer: \_\_\_\_\_

- 9) Find area of square having each side (s) equals 55 m



Answer: \_\_\_\_\_

- 10) Find area of square having each side (s) equals 56 m



Answer: \_\_\_\_\_

**Total: \_\_\_\_ / 10**

Name: \_\_\_\_\_

October 26, 2020

Sr: 26102020-1771



11-PLUS  
SATS  
GCSES



**Answers:**

- |           |          |           |          |          |          |          |
|-----------|----------|-----------|----------|----------|----------|----------|
| 1) 6400cm | 2) 196cm | 3) 7569ft | 4) 3481m | 5) 8464m | 6) 4624m | 7) 5929m |
| 8) 529cm  | 9) 3025m | 10) 3136m |          |          |          |          |